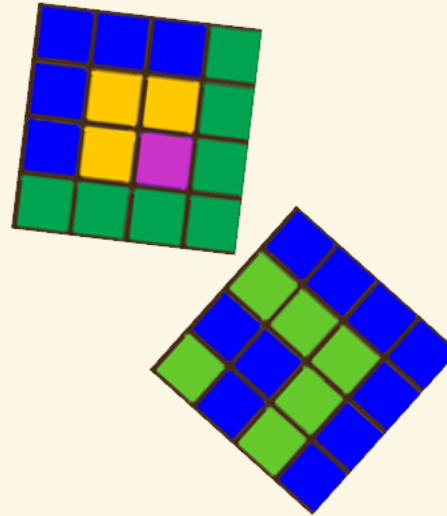



1. What do you see?



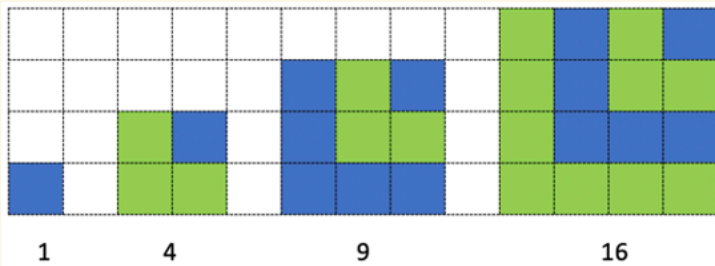
2. What math art might you make?



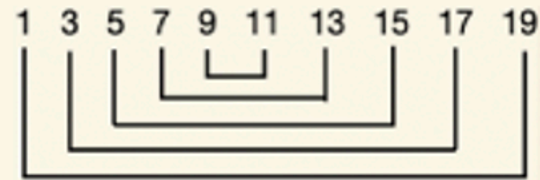
3. How many odd numbers hiding in the square?



4. How many blocks in the 5th stage?
In the 10th stage?
In the 100th stage?
In the Nth stage?



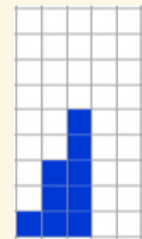
5. What is this?




6. Plot odd numbers 1-5 as a bar graph.

Plot sums in stages 1-5 as a bar graph.

How do they grow?



Odds



Sums