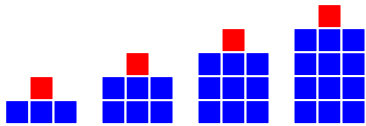


Growing Patterns Practice

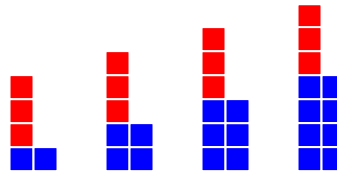
1. Complete the table for each pattern.

a.



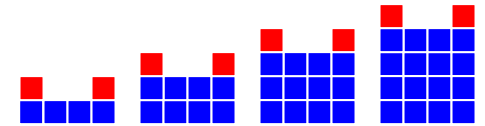
CAR #	BLOCKS
1	$3 + 1 = 4$
2	$6 + 1 = 7$
3	
4	
5	
10	
100	

b.



CAR #	BLOCKS
1	
2	
3	
4	
5	
10	
100	

c.



CAR #	BLOCKS
1	
2	
3	
4	
5	
10	
100	

2. Complete the table. Draw a growing pattern to match the pattern in the table.

CAR #	BLOCKS
1	$1 + 3 = 4$
2	$2 + 3 = 5$
3	$3 + 3 = 6$
4	$4 + 3 = 7$
5	
10	
100	

3. Create a new growing pattern in the table below. Draw a matching pattern.

CAR #	BLOCKS
1	
2	
3	
4	
5	
10	
100	