

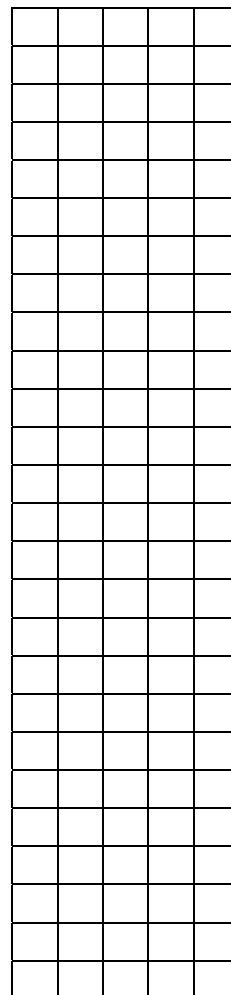
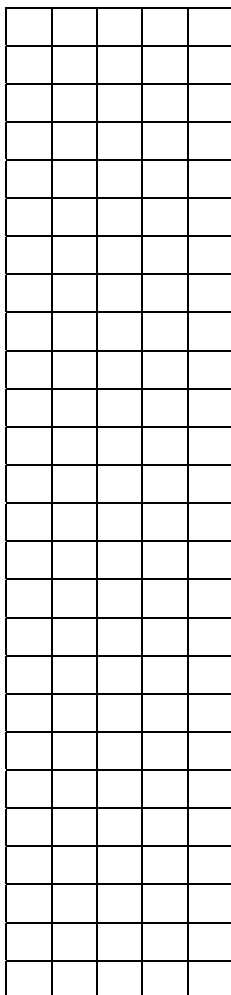
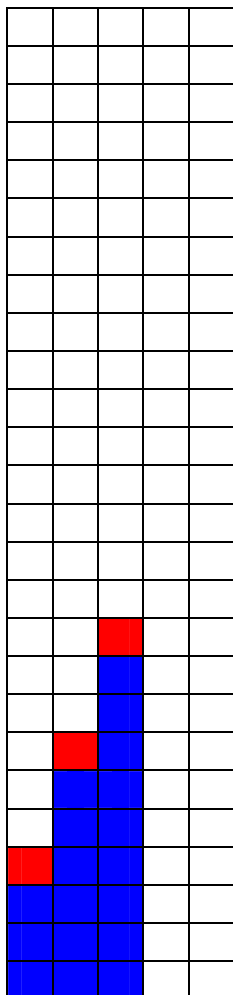
Graphing Growing patterns - Practice

1. Graph each growing pattern.

CAR #	BLOCKS
1	$3 + 1 = 4$
2	$6 + 1 = 7$
3	$9 + 1 = 10$
4	
5	

CAR #	BLOCKS
1	$4 + 2 = 6$
2	$8 + 2 = 10$
3	$12 + 2 = 14$
4	
5	

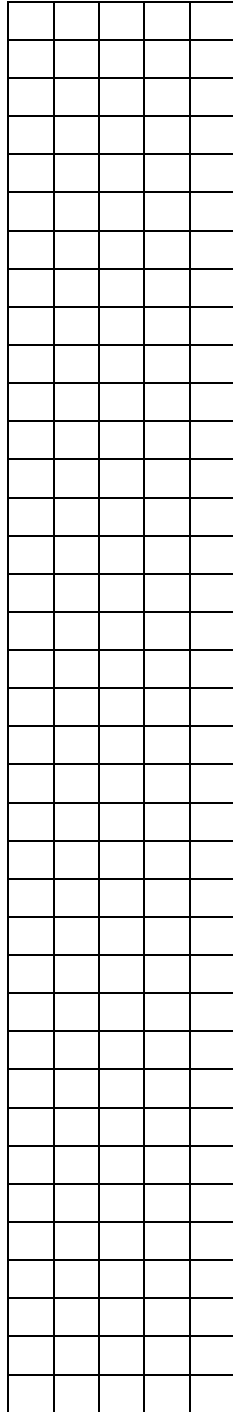
CAR #	BLOCKS
1	$2 + 5 = 7$
2	$4 + 5 = 9$
3	$6 + 5 = 11$
4	
5	



2. Complete the table.

Draw a bar graph to represent the pattern.

CAR #	BLOCKS
1	$1 + 3 = 4$
2	$2 + 3 = 5$
3	$3 + 3 = 6$
4	
5	



3. Create a new growing pattern in the table below.

Draw a matching bar graph.

CAR #	BLOCKS
1	
2	
3	
4	
5	

