

Creating Growing patterns - 2 colours

1. Create 4 different growing patterns, in two colours. Sketch each pattern, and complete the table and bar graph.

a) the first pattern

b) a steeper one

c) one that's less steep

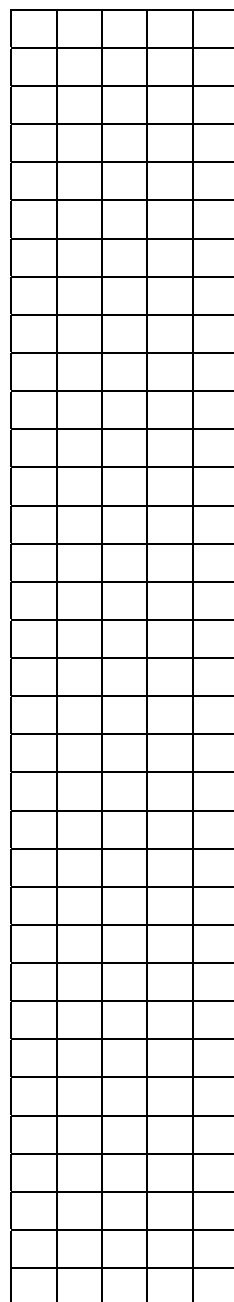
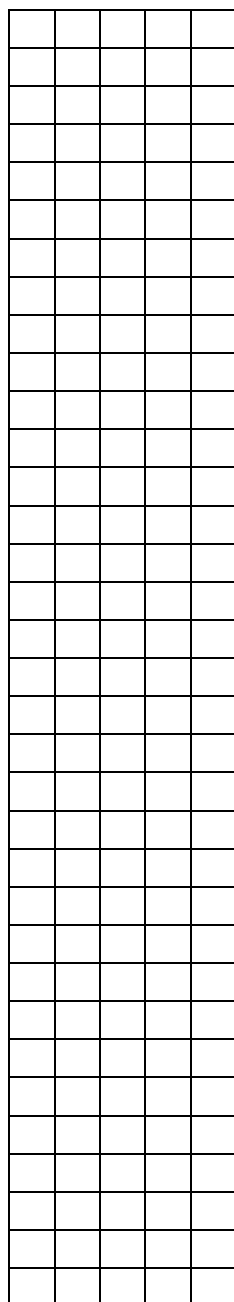
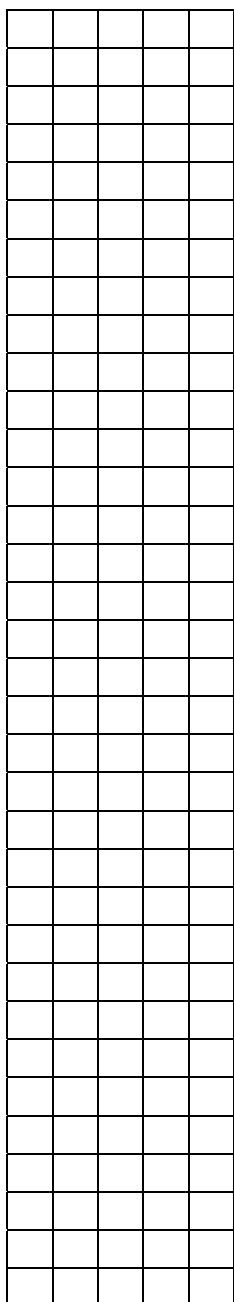
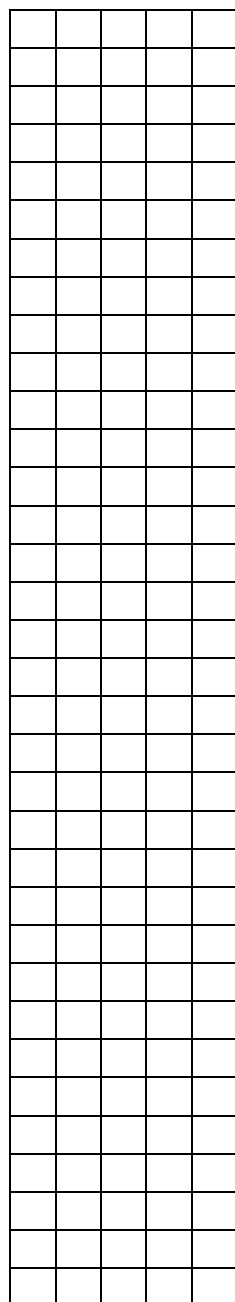
d) one that is shrinking

CAR #	BLOCKS
1	
2	
3	
4	
5	

CAR #	BLOCKS
1	
2	
3	
4	
5	

CAR #	BLOCKS
1	
2	
3	
4	
5	

CAR #	BLOCKS
1	
2	
3	
4	
5	



Creating Growing patterns - 3 colours

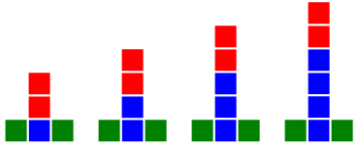
2. Create 4 different growing patterns, in 3 colours. Sketch each pattern, and complete the table and bar graph.

a) 1 colour growing

b) create a new one

c) 2 colours growing

d) create a new one



CAR #	BLOCKS
1	
2	
3	
4	
5	

CAR #	BLOCKS
1	
2	
3	
4	
5	

CAR #	BLOCKS
1	
2	
3	
4	
5	

CAR #	BLOCKS
1	
2	
3	
4	
5	

